



SNS academy

an International CBSE Finger Print School
Coimbatore



Name :

Date :

Grade : IV

Worksheet

Submission Date :

Subject : Math

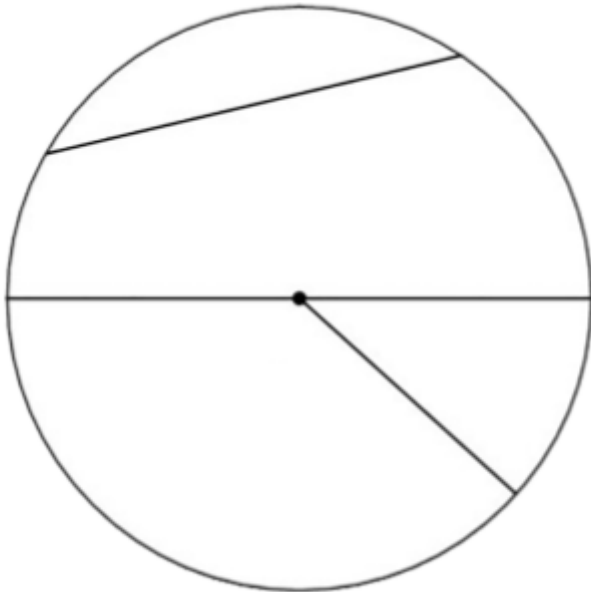
Parent's sign :

SHAPES AROUND US

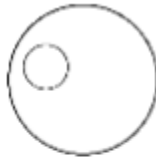
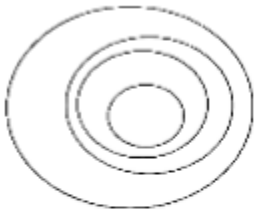
I. Give one difference between.

1. A regular polygon and an irregular polygon
2. A triangle and a quadrilateral
3. A rectangle and a square

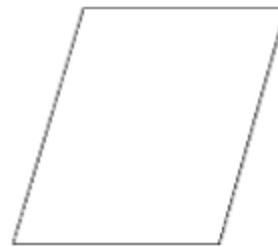
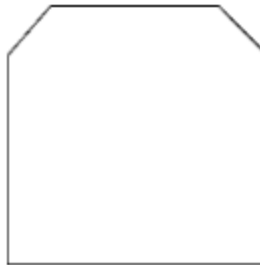
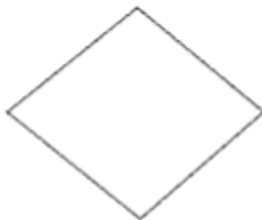
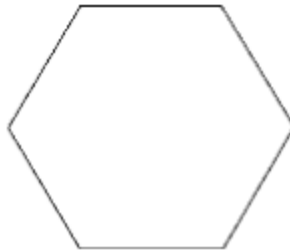
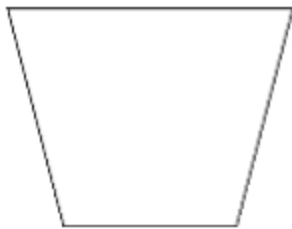
II. Colour the radius blue, diameter red and chord green in the circle given below.



III. Identify the figure that shows concentric circles. Put a tick in the box below it.



IV. Draw line(s) of symmetry for the given shapes (Remember the shape may have more than one line of symmetry).



V. Draw a shape or design having four lines of symmetry. Draw the lines of symmetry in it.