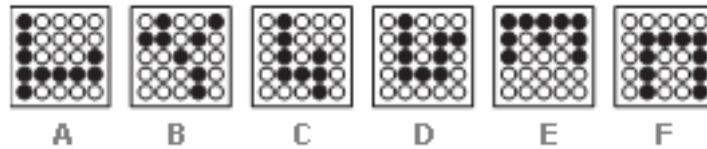






PUZZLES - LOGICAL

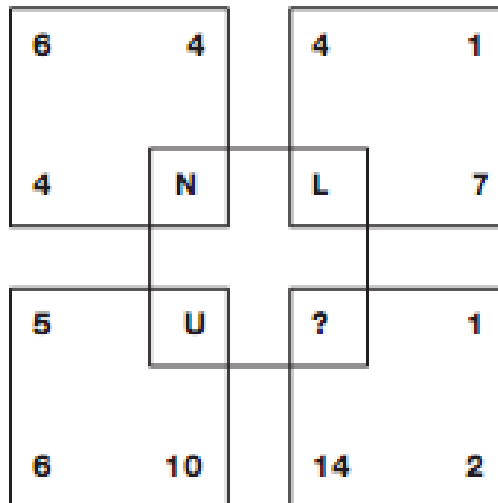
1)

What is missing in the last grid?



2)

Which letter replaces the question mark?





PUZZLES - LOGICAL

ANSWER

1) D

Explanation:

The number of black dots in each grid increases by 1 each time, starting with the top left grid and working to the right, top row then bottom row.

2) Q

Explanation:

Adding the three numbers in each square together gives the numerical value of the letter at the centre of each square.